



g g g g g g g g


5 5 5 5 5 5 5 5

4 4 4 4 4 4 4 4




$$\square + \square = \square$$

$$\square + \square = \square$$



$$\square - \square = \square$$

$$\square - \square = \square$$



$$\square = \square + \square$$

$$\square = \square + \square$$